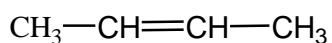
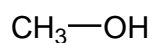


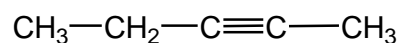
Να ονομαστούν οι ενώσεις



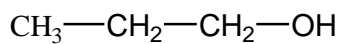
(1)



(2)



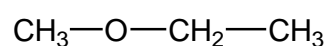
(3)



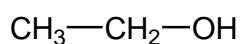
(4)



(5)



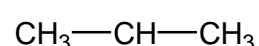
(6)



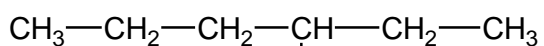
(7)



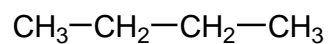
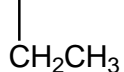
(8) OH



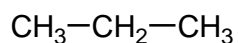
(9) CH<sub>3</sub>



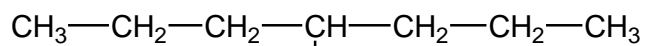
(10)



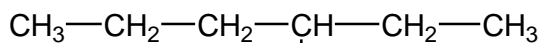
(11)



(12)



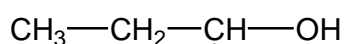
(13)



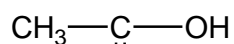
(14)



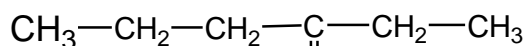
(15)



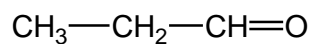
(16)



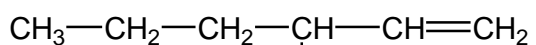
(17)



(18)



(19)



(20)



(21)

## Απαντήσεις

- |                       |                           |
|-----------------------|---------------------------|
| 1) 2-Βουτένιο         | 12) Προπάνιο              |
| 2) Μεθανόλη           | 13) 4-Μεθυλοεπτάνιο       |
| 3) 2-Πεντίνιο         | 14) 2-Αιθυλοπεντανικό οξύ |
| 4) 1-Προπανόλη        | 15) Μεθανικό οξύ          |
| 5) 2-Βουτίνιο         | 16) 2-Βουτανόλη           |
| 6) Αιθυλομεθυλαιθέρας | 17) Αιθανικό οξύ          |
| 7) Αιθανόλη           | 18) 3-Εξανόνη             |
| 8) 2-Προπανόλη        | 19) Προπανάλη             |
| 9) Μεθυλοπροπάνιο     | 20) 2-Προπυλο-3-βουτανάλη |
| 10) 3-Αιθυλοεξάνιο    | 21) Προπανόνη             |
| 11) Βουτάνιο          |                           |

Για τις εξετάσεις του Ιουνίου πρέπει να γνωρίζετε τις ενώσεις: 1, 2, 3, 4, 5, 7, 8, 9, 10, 11, 12, 13, 15, 16, 17, 18, 19, 21.